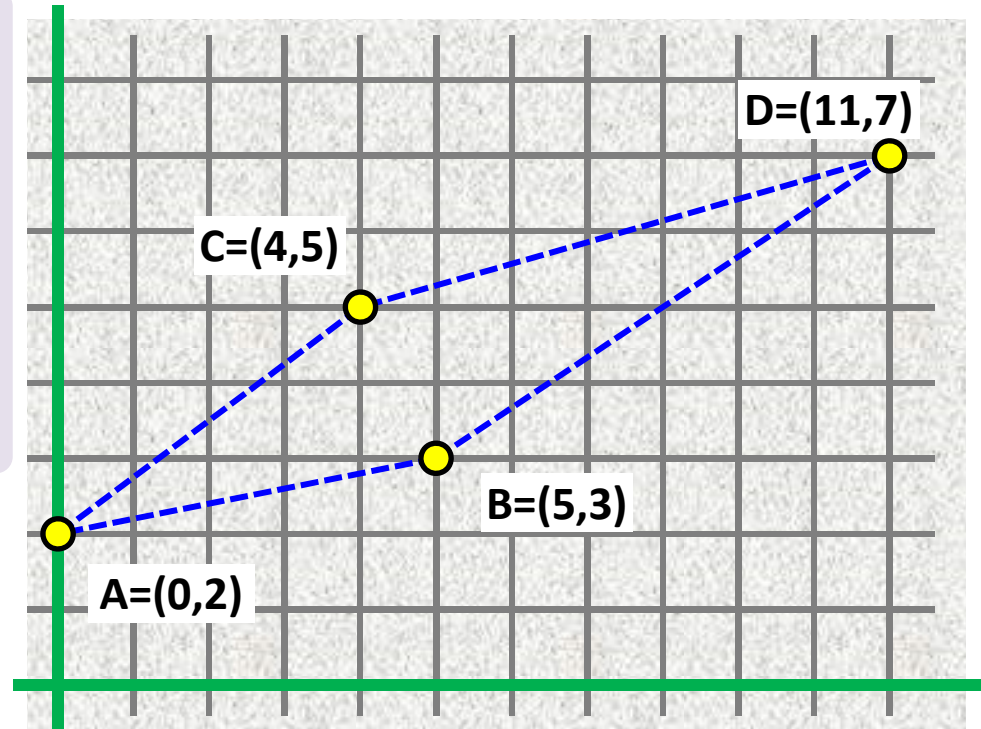


Distance (A, B) =

$$= \text{sqrt}((Ax-Bx)^2 + (Ay-By)^2)$$

= distance (B, A)



Comparing distances

Compare squares of distances

(faster, integer coordinates → no floats!)

$$\text{dist}(A, B) < \text{dist}(B, C) \Leftrightarrow \text{dist}(A, C)^2 < \text{dist}(B, C)^2$$

$$\text{dist}(A, B)^2 = (0-5)^2 + (2-3)^2 = 26$$

$$\text{dist}(A, C)^2 = (0-4)^2 + (2-5)^2 = 25$$

$$\text{dist}(C, D)^2 = (4-11)^2 + (5-7)^2 = 53$$

$$\text{dist}(B, D)^2 = (5-11)^2 + (3-7)^2 = 52$$

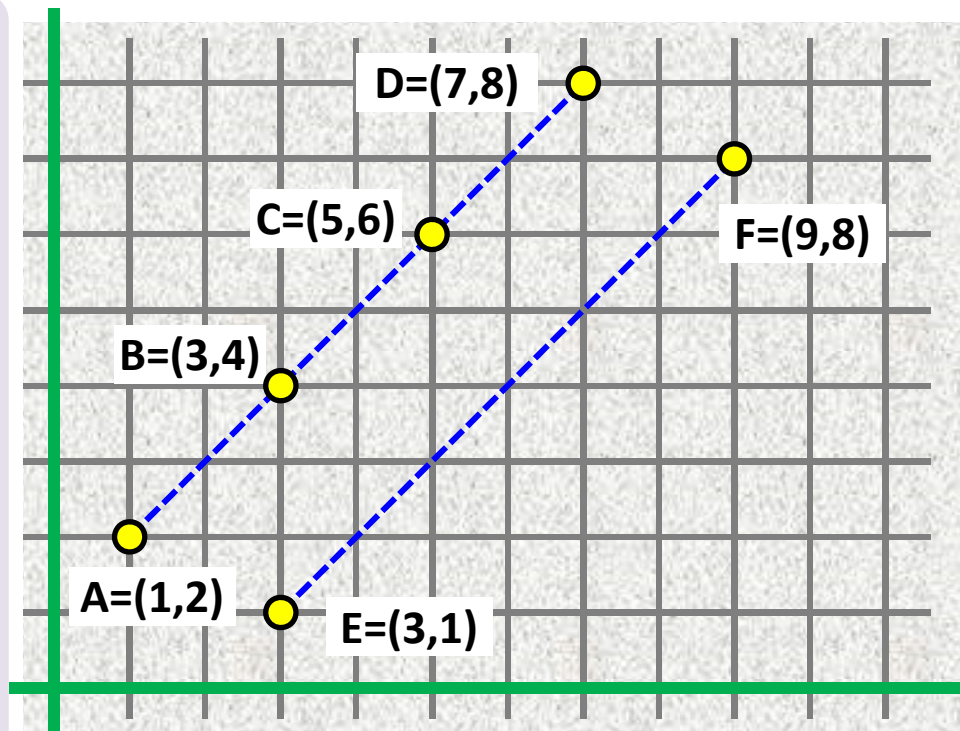
Comparing distances example

$$\text{dist}(A, D) = \text{dist}(A,B) + \text{dist}(B,C) + \text{dist}(C,D)$$

$$= \sqrt{8} + \sqrt{8} + \sqrt{8}$$

$$\text{dist}(E, F) = \sqrt{72}$$

theoretically: $\text{dist}(E, F) = \text{dist}(A, D)$



Implementation with double (IEEE 754 floating-point standard):

$$\sqrt{8} + \sqrt{8} + \sqrt{8} = 8.485281374238571$$

$$\sqrt{72} = 8.485281374238570$$

Bits in double representations:

0100000000100000111110000111011011001100110111110110110011011010**10**

010000000010000011111000011101101100110011011111011011001101100**1**

$$\mathbf{AB} = \text{vector}(A,B) = B - A$$

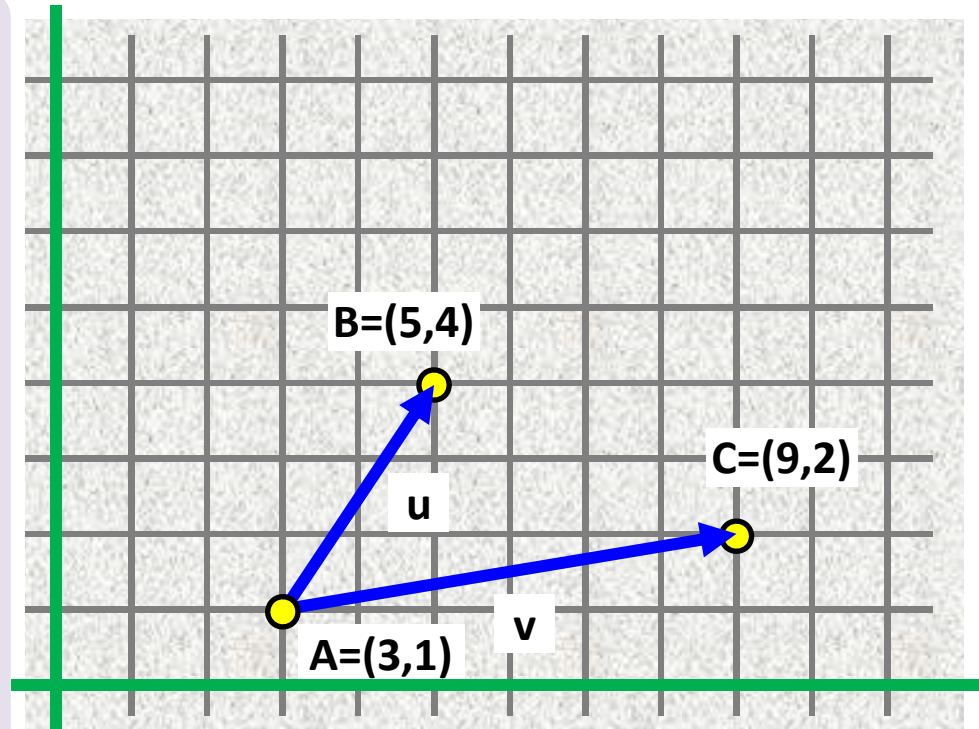
$$\mathbf{AB} = (B_x - A_x, B_y - A_y)^T$$

Vector **norm** = vector **length**

$$\|\mathbf{AB}\| = \|\mathbf{BA}\|$$

$$\|\mathbf{AB}\| = \sqrt{(B_x - A_x)^2 + (B_y - A_y)^2}$$

$$\|\mathbf{AB}\| = \text{distance}(A, B)$$



$$\mathbf{u} = \mathbf{AB} = B - A = (5 - 3, 4 - 1)^T = (2, 3)^T$$

$$\mathbf{v} = \mathbf{AC} = C - A = (9 - 3, 2 - 1)^T = (6, 1)^T$$

$$\|\mathbf{u}\| = \sqrt{2^2 + 3^2} = \sqrt{13}$$

$$\|\mathbf{v}\| = \sqrt{6^2 + 1^2} = \sqrt{37}$$

in Euclidean space

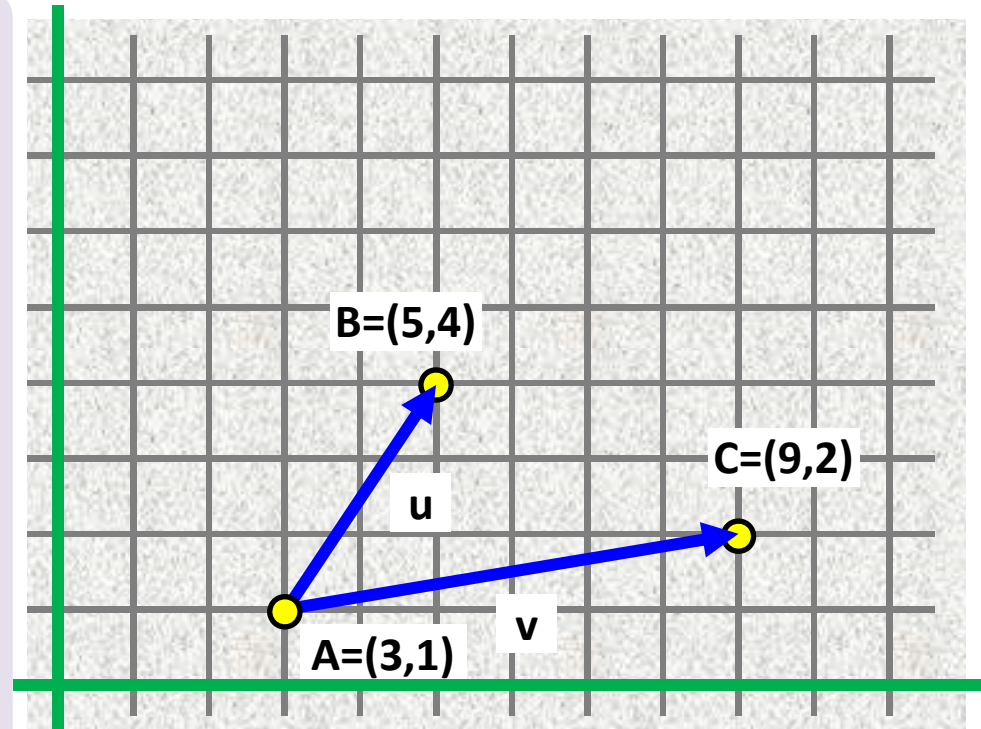
Dot product \equiv scalar product

$$\langle \mathbf{u}, \mathbf{v} \rangle = \langle \mathbf{v}, \mathbf{u} \rangle = \mathbf{u} \cdot \mathbf{v} = \mathbf{v} \cdot \mathbf{u}$$

// commutative

$$\text{sum}(i = 1..dimension, \mathbf{u}[i] * \mathbf{v}[i])$$

$$= u_x v_x + u_y v_y \quad // \text{ in 2D}$$



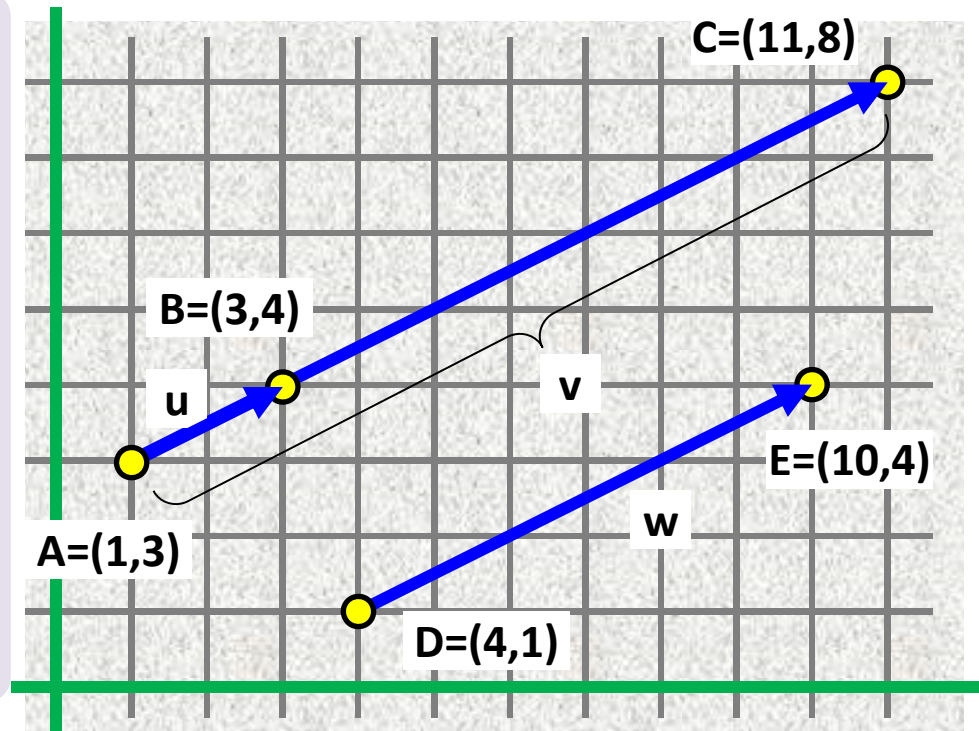
$$\mathbf{u} = \mathbf{AB} = \mathbf{B} - \mathbf{A} = (5 - 3, 4 - 1)^T = (2, 3)^T$$

$$\mathbf{v} = \mathbf{AC} = \mathbf{C} - \mathbf{A} = (9 - 3, 2 - 1)^T = (6, 1)^T$$

$$\langle \mathbf{u}, \mathbf{v} \rangle = 2 * 6 + 3 * 1 = 15$$

Vectors \mathbf{u} and \mathbf{v} are **collinear** if and only if \mathbf{u} is a non-zero multiple of \mathbf{v} (and vice versa) or equivalently:

$$\text{determinant} \quad \begin{vmatrix} u_x & v_x \\ u_y & v_y \end{vmatrix} = 0$$



$$\mathbf{u} = (2, 1)^T$$

$$\mathbf{v} = (10, 5)^T$$

$$\mathbf{w} = (6, 3)^T$$

$$\det(\mathbf{u}, \mathbf{v}) = \det((2, 1)^T, (10, 5)^T) = \det \begin{pmatrix} 2 & 10 \\ 1 & 5 \end{pmatrix} = 2 \cdot 5 - 1 \cdot 10 = 0$$

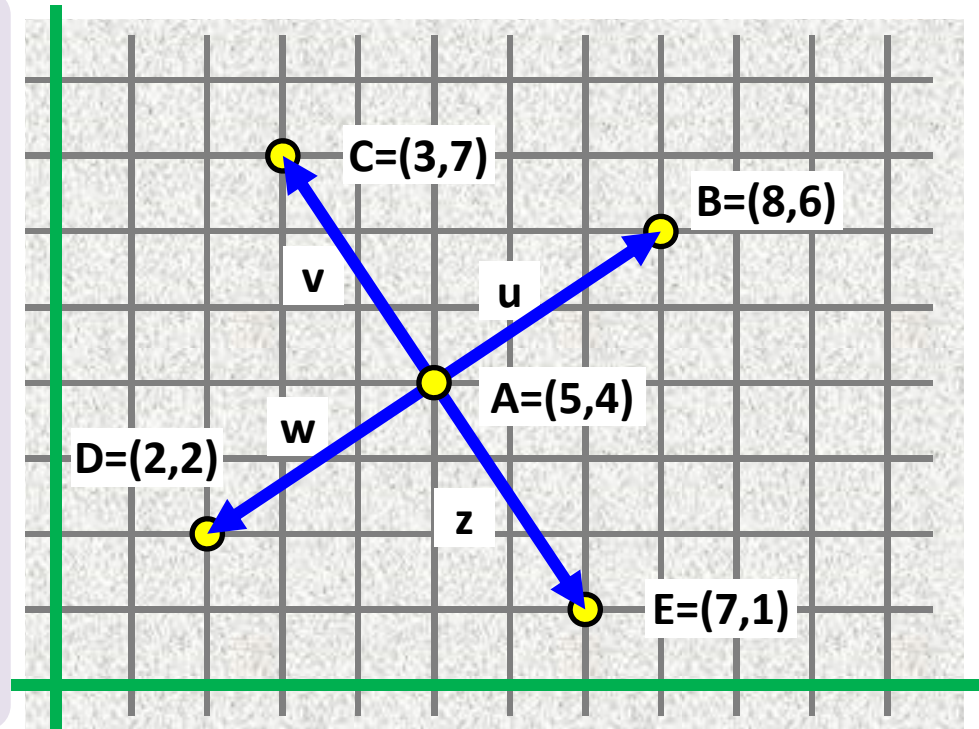
$$\det(\mathbf{u}, \mathbf{w}) = \det((2, 1)^T, (6, 3)^T) = \det \begin{pmatrix} 2 & 6 \\ 1 & 3 \end{pmatrix} = 2 \cdot 3 - 1 \cdot 6 = 0$$

$$\det(\mathbf{v}, \mathbf{w}) = \det((10, 5)^T, (6, 3)^T) = \det \begin{pmatrix} 10 & 6 \\ 5 & 3 \end{pmatrix} = 10 \cdot 3 - 5 \cdot 6 = 0$$

Nonzero vectors \mathbf{u} , \mathbf{v}
are **perpendicular** to each other

$$\mathbf{u} \perp \mathbf{v}$$

iff scalar product $\langle \mathbf{u}, \mathbf{v} \rangle = 0$



$$\mathbf{u} = (3, 2)^T$$

$$\mathbf{u} \perp \mathbf{v}: \langle (3, 2)^T, (-2, 3)^T \rangle = 3*(-2) + 2*3 = 0$$

$$\mathbf{v} = (-2, 3)^T$$

$$\mathbf{v} \perp \mathbf{w}: \langle (-2, 3)^T, (-3, -2)^T \rangle = (-2)*(-3) + 3*(-2) = 0$$

$$\mathbf{w} = (-3, -2)^T$$

$$\mathbf{w} \perp \mathbf{z}: \langle (-3, -2)^T, (2, -3)^T \rangle = (-3)*2 + (-2)*(-3) = 0$$

$$\mathbf{z} = (2, -3)^T$$

$$\mathbf{z} \perp \mathbf{u}: \langle (2, -3)^T, (3, 2)^T \rangle = 2*3 + (-3)*2 = 0$$

Area of a triangle given by
vectors $\mathbf{u}, \mathbf{v} = \mathbf{AB}, \mathbf{AC}$

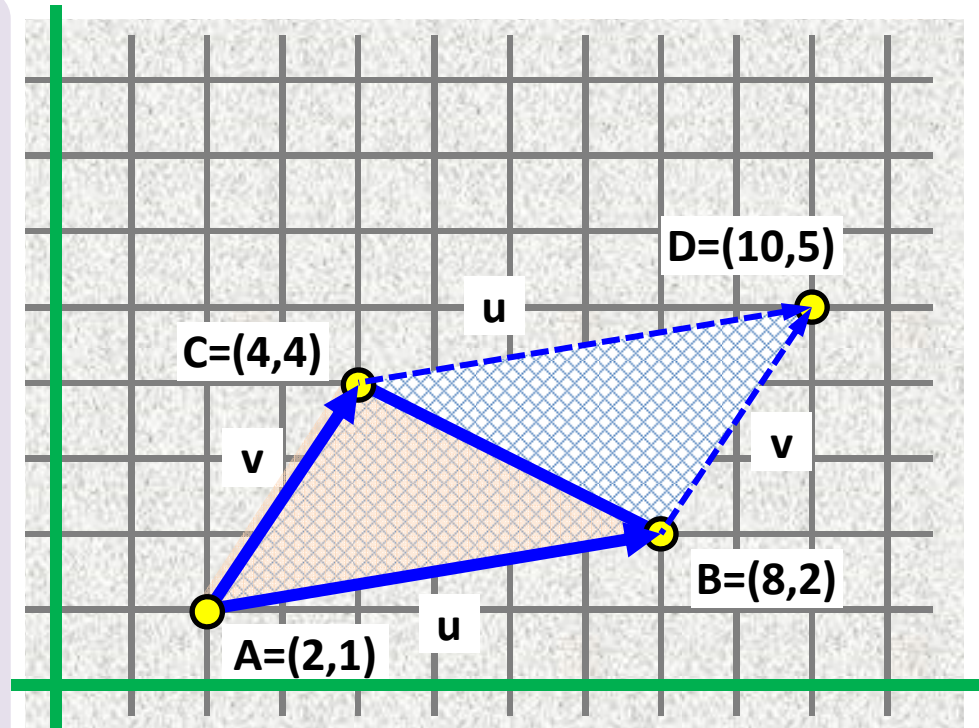
$$\frac{1}{2} \cdot |\det(\mathbf{u}, \mathbf{v})|$$

Area of parallelogram ABCD
($\mathbf{D} = \mathbf{B} + \mathbf{v} = \mathbf{C} + \mathbf{u}$)

$$|\det(\mathbf{u}, \mathbf{v})|$$

Vector mutual position matters:

$$\det(\mathbf{v}, \mathbf{u}) = -\det(\mathbf{u}, \mathbf{v})$$



Triangle ABC area =

$$= \text{abs}(\det((6, 1)^T, (2, 3)^T)) / 2 = \text{abs}(6 \cdot 3 - 1 \cdot 2) / 2 = 8 \quad // \text{ vectors } \mathbf{AB}, \mathbf{AC}$$

$$= \text{abs}(\det((-6, -1)^T, (-4, 2)^T)) / 2 = \text{abs}((-6) \cdot 2 - (-4) \cdot (-1)) / 2 = 8 \quad // \text{ vectors } \mathbf{BA}, \mathbf{BC}$$

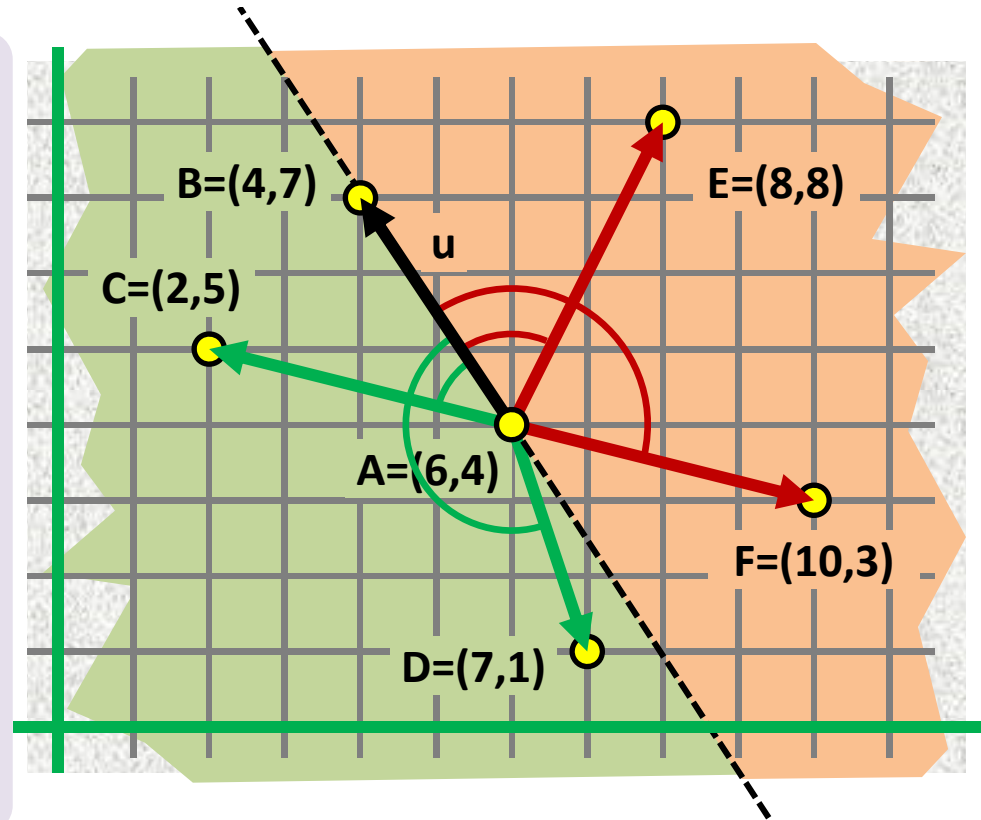
$$= \text{abs}(\det((-2, -3)^T, (4, -2)^T)) / 2 = \text{abs}((-2) \cdot (-2) - (-3) \cdot 4) / 2 = 8 \quad // \text{ vectors } \mathbf{CA}, \mathbf{CB}$$

Relative orientation of vectors

angle (\mathbf{u}, \mathbf{v}) ... how much to turn \mathbf{u}
to the left to obtain
a vector parallel to \mathbf{v}

$$\det(\mathbf{u}, \mathbf{v}) > 0 \Leftrightarrow 0 < \text{angle}(\mathbf{u}, \mathbf{v}) < 180$$

$$\det(\mathbf{u}, \mathbf{v}) < 0 \Leftrightarrow 180 < \text{angle}(\mathbf{u}, \mathbf{v}) < 360$$



$$\mathbf{u} = (\mathbf{B}-\mathbf{A})^T = (-2, 3)^T$$

$$\det(\mathbf{u}, \mathbf{AC}) = \det((-2, 3)^T, (-4, 1)^T) = -2*1 - 3*(-4) = 10 > 0$$

$$\det(\mathbf{u}, \mathbf{AD}) = \det((-2, 3)^T, (1, -3)^T) = -2*(-3) - 3*1 = 3 > 0$$

$$\det(\mathbf{u}, \mathbf{AE}) = \det((-2, 3)^T, (2, 4)^T) = -2*4 - 3*2 = -14 < 0$$

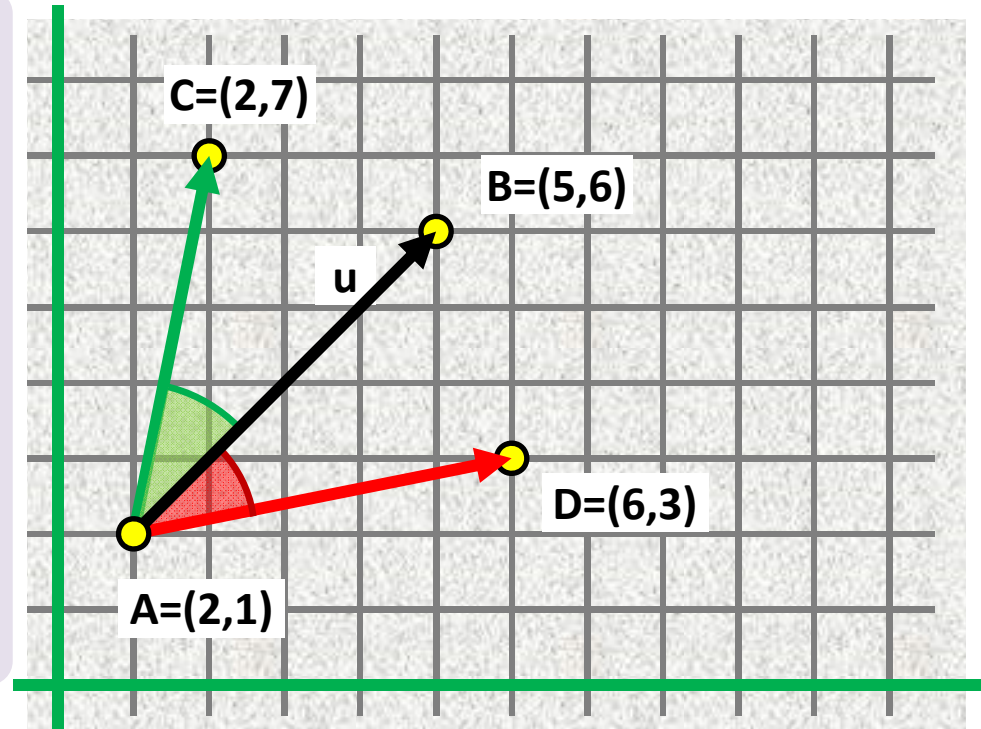
$$\det(\mathbf{u}, \mathbf{AF}) = \det((-2, 3)^T, (4, -1)^T) = -2*(-1) - 3*4 = -10 < 0$$

Angle of vectors

$$\cos \text{ angle} = \langle \mathbf{u}, \mathbf{v} \rangle / (\|\mathbf{u}\| \|\mathbf{v}\|)$$

$$\text{angle} = \arccos (\langle \mathbf{u}, \mathbf{v} \rangle / (\|\mathbf{u}\| \|\mathbf{v}\|))$$

Relative orientation of \mathbf{u} and \mathbf{v}
is **not** calculated



$$\mathbf{u} = (4, 4)^T$$

$$\begin{aligned} \cos \angle BAC &= \langle \mathbf{u}, \mathbf{AC} \rangle / (\|\mathbf{u}\| \|\mathbf{AC}\|) = \cos \angle CAB = \langle \mathbf{AC}, \mathbf{u} \rangle / (\|\mathbf{AC}\| \|\mathbf{u}\|) \\ &= \langle (4, 4)^T, (1, 5)^T \rangle / (\|(4, 4)^T\| \|(1, 5)^T\|) \\ &= (4*1 + 4*5) / (\text{sqrt}(32) * \text{sqrt}(26)) = 24 / (8*\text{sqrt}(13)) = 3/\text{sqrt}(13) \end{aligned}$$

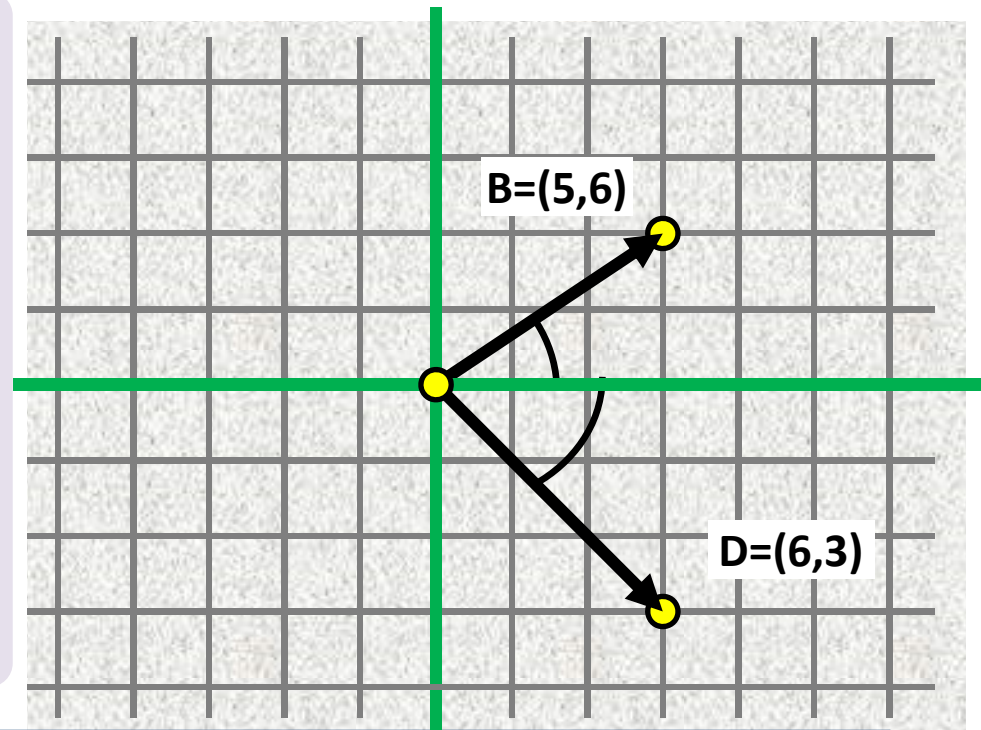
$$\begin{aligned} \cos \angle BAD &= \langle \mathbf{u}, \mathbf{AD} \rangle / (\|\mathbf{u}\| \|\mathbf{AD}\|) = \cos \angle DAB = \langle \mathbf{AD}, \mathbf{u} \rangle / (\|\mathbf{AD}\| \|\mathbf{u}\|) \\ &= \langle (4, 4)^T, (5, 1)^T \rangle / (\|(4, 4)^T\| \|(5, 1)^T\|) \\ &= (4*5 + 4*1) / (\text{sqrt}(32) * \text{sqrt}(26)) = 24 / (8*\text{sqrt}(13)) = 3/\text{sqrt}(13) \end{aligned}$$

$$\angle BAC = \angle BAD = \arccos (3 / \text{sqrt}(13)) = 0.588 \text{ rad} = 33.69^\circ$$

$$\begin{aligned} \pi \text{ rad} &= 180 \text{ deg} \\ 1 \text{ rad} &= 180/\pi \text{ deg} \\ 1 \text{ deg} &= \pi/180 \text{ rad} \end{aligned}$$

Angle of vector (x, y)
in quadrant I and IV

angle = $\arctan(y/x)$



`double atan2(double y, double x);`
Returns the **principal value** of the arc tangent of y/x , expressed in radians.

```
dot = x1*x2 + y1*y2 // dot product between [x1, y1] and [x2, y2]
det = x1*y2 - y1*x2 // determinant
angle = atan2(det, dot) // atan2(y, x) or atan2(sin, cos)
```

Note that the documentation does not mention the case $x == 0.0$. (??)
($y/0.0$ is undefined, or $\pm\infty$ right?). However, the function returns correct value.
E.g. `cout << atan2(1, 0) * 2 << endl; // prints 3.14159, as one would expect.`

Two points $\mathbf{A} = (A_x, A_y)$, $\mathbf{B} = (B_x, B_y)$

→ line equation

$$ax + by + c = 0$$

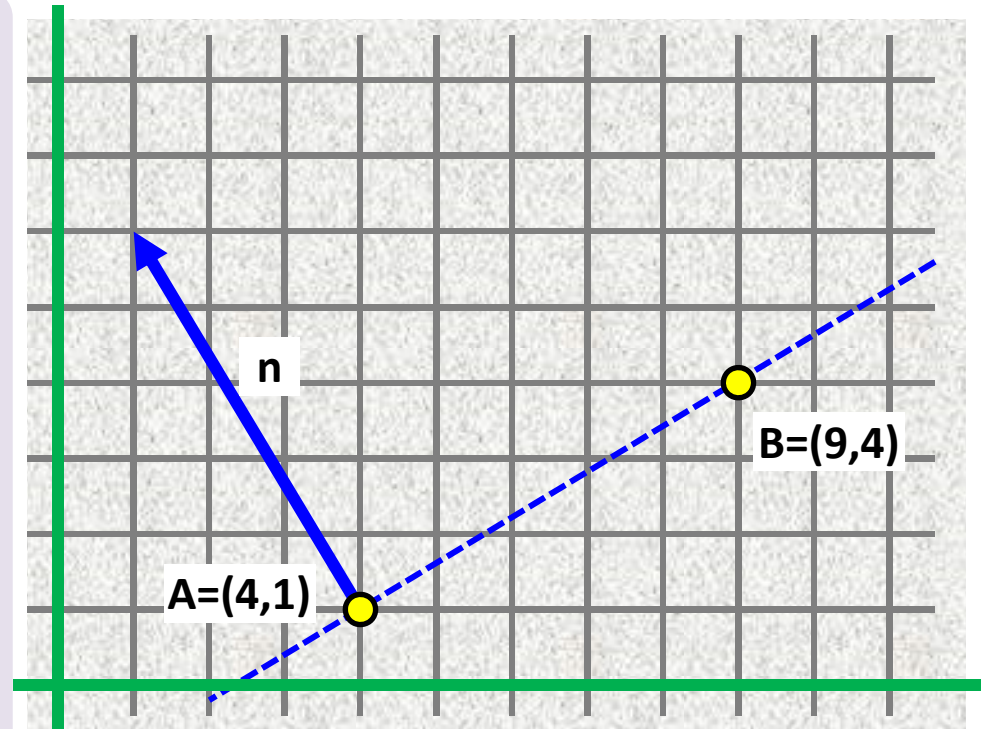
1. Normal vector $\mathbf{n} = (a, b)^T$

2. A lies on the line $AB \Rightarrow$

$$a \cdot A_x + b \cdot A_y + c = 0 \Rightarrow$$

$$c = -a \cdot A_x - b \cdot A_y \Rightarrow$$

$$a \cdot x + b \cdot y - a \cdot A_x - b \cdot A_y = 0$$



$$\mathbf{AB} = (5,3)^T$$

$$\mathbf{n} = (-3, 5),$$

$$\text{equation: } -3x + 5y + c = 0$$

$$c = -(-3) \cdot 4 - 5 \cdot 1 = 7 \quad \text{equation: } -3x + 5y + 7 = 0$$

(Check: plug coords of B = (9, 4) into the equation: $-3 \cdot 9 + 5 \cdot 4 + 7 = -27 + 20 + 7 = 0$)

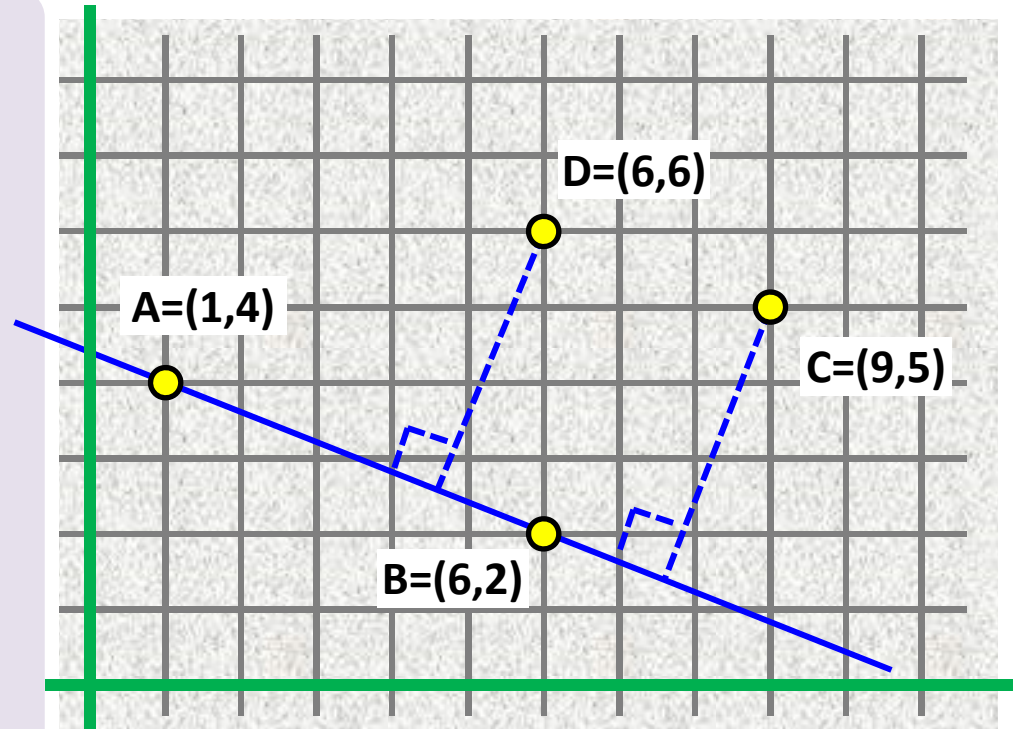
Distance point to line

Point P: (P_x, P_y)

Line: $ax + by + c = 0$

Distance(P, line) =

$$| a \cdot P_x + b \cdot P_y + c | / \| (a, b)^T \|$$



$$\text{line AB: } 2x + 5y - 22 = 0$$

$$C = (9, 5)$$

$$D = (6, 6)$$

$$\text{dist}(C, AB) = \text{abs}(2 \cdot 9 + 5 \cdot 5 - 22) / \text{sqrt}(2 \cdot 2 + 5 \cdot 5) = 21 / \text{sqrt}(29) \approx 3.8996$$

$$\text{dist}(D, AB) = \text{abs}(2 \cdot 6 + 5 \cdot 6 - 22) / \text{sqrt}(2 \cdot 2 + 5 \cdot 5) = 20 / \text{sqrt}(29) \approx 3.7139$$

Distance point to segment

Point P: (P_x, P_y)

Segment: AB

Normal vector \mathbf{n} to AB

If vectors \mathbf{PA} and \mathbf{PB}

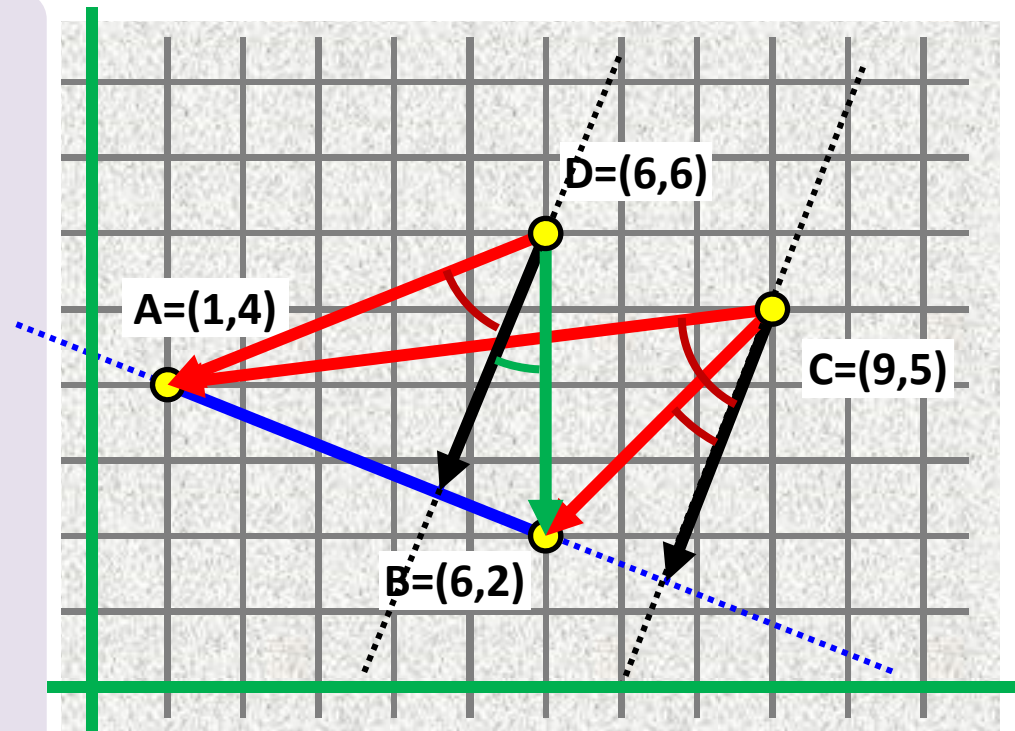
are "on the same side" wrt \mathbf{n}

then

$$\text{dist}(P, AB) = \min(\text{dist}(P, A), \text{dist}(P, B))$$

else

$$\text{dist}(P, AB) = \text{dist}(P, \text{line AB})$$



Being "on the same side" wrt \mathbf{n} means

that the angle between \mathbf{n} and \mathbf{PA} and the angle between \mathbf{n} and \mathbf{PB} are either both between 0° and 180° or both between 180° and 360° .

In other words, the sign of $\det(\mathbf{n}, \mathbf{PA})$ and $\det(\mathbf{n}, \mathbf{PB})$ is the same, or simply $\det(\mathbf{n}, \mathbf{PA}) * \det(\mathbf{n}, \mathbf{PB}) > 0$.

Line-line intersection P

$$a_1 \cdot x + b_1 \cdot y + c_1 = 0,$$

$$a_2 \cdot x + b_2 \cdot y + c_2 = 0$$

Solution of syst. of two lin. eq. in x and y,
using Cramer rule:

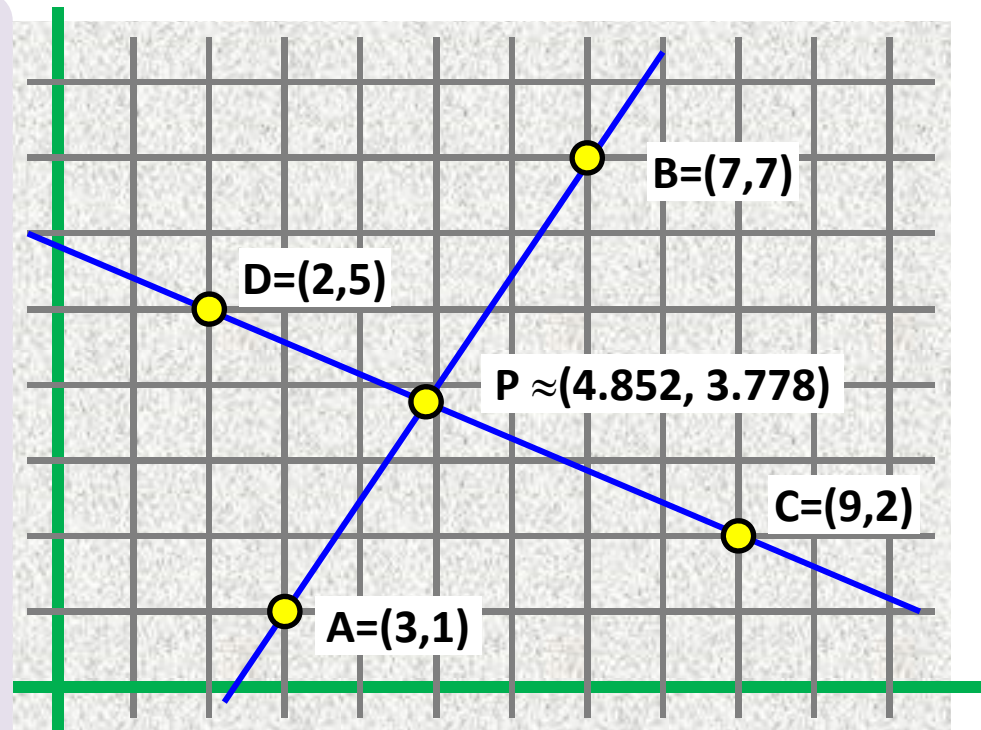
$$\det(\mathbf{n1}^T, \mathbf{n2}^T) = a_1 \cdot b_2 - a_2 \cdot b_1$$

if $\det(\mathbf{n1}^T, \mathbf{n2}^T) == 0$ then collinear

if $\det(\mathbf{n1}^T, \mathbf{n2}^T) \neq 0$ then

$$P_x = (b_1 \cdot c_2 - b_2 \cdot c_1) / \det(\mathbf{n1}^T, \mathbf{n2}^T)$$

$$P_y = (c_1 \cdot a_2 - c_2 \cdot a_1) / \det(\mathbf{n1}^T, \mathbf{n2}^T)$$



line eq: $\mathbf{n}^T = (a, b), ax + by - a \cdot Ax - b \cdot Ay = 0$

$$\text{line AB: } \mathbf{n1}^T = (-6, 4); \quad -6x + 4y + 14 = 0$$

$$\text{line CD: } \mathbf{n2}^T = (3, 7); \quad 3x + 7y - 41 = 0$$

$$\det(\mathbf{n1}^T, \mathbf{n2}^T) = (-6) \cdot 7 - 4 \cdot 3 = -54$$

$$P_x = (4 \cdot (-41) - 7 \cdot 14) / (-54) = -262 / -54 \approx 4.852$$

$$P_y = (14 \cdot 3 - (-41) \cdot (-6)) / (-54) = -204 / -54 \approx 3.778$$

segment segment intersection

does (A,B) intersect (C, D) ?

Homework:

- C and D should not lie on the same side of line (A, D)
- A and B should not lie on the same side of line (C, D)
- also check collinearity (A,B) and (C, D).

Another method:

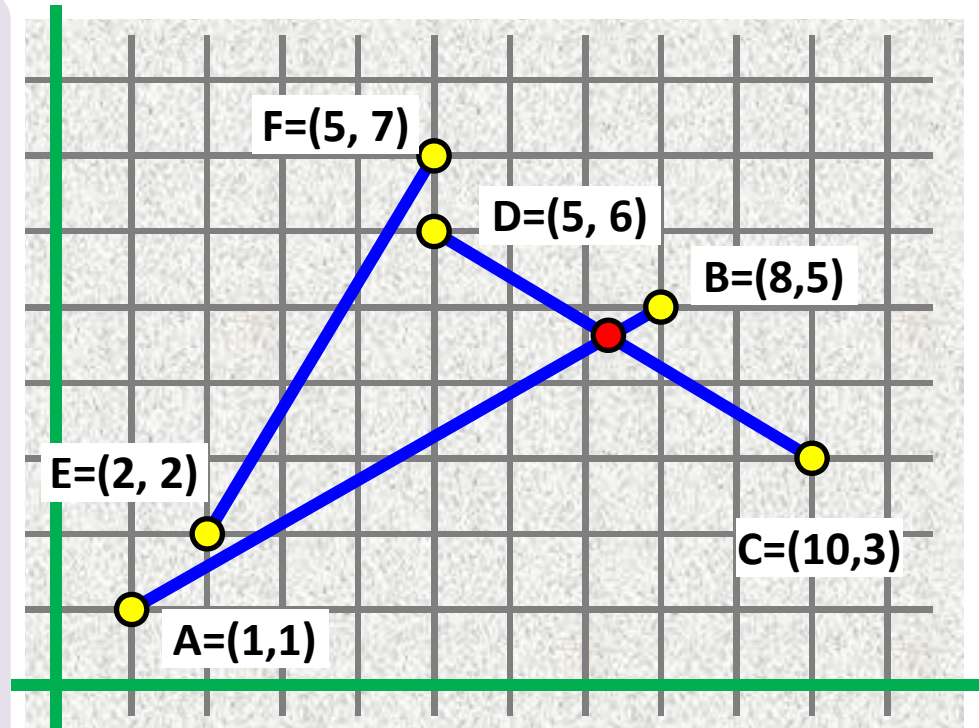
if A and B are on different sides of CD
AND

C and D are on different sides of AB
then

X := line-line intersection of AB and CD

else

no intersection.



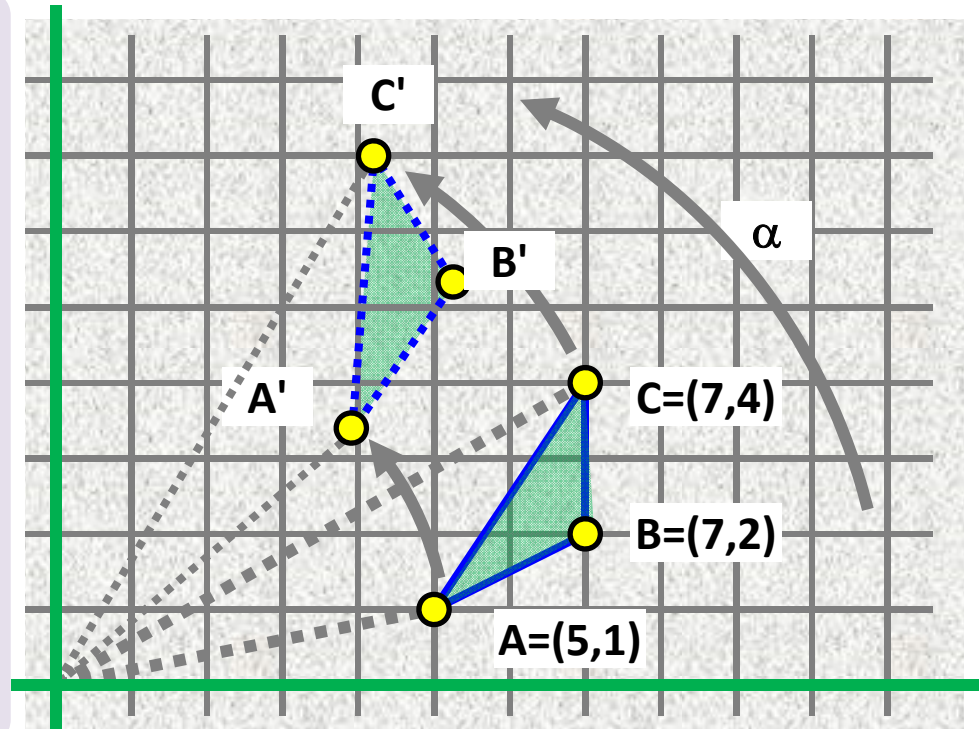
Rotate point $A = (A_x, A_y)$
counterclockwise (!) around origin
by a given angle α :

$$\begin{pmatrix} \cos \alpha & -\sin \alpha \\ \sin \alpha & \cos \alpha \end{pmatrix} \begin{pmatrix} A_x \\ A_y \end{pmatrix} =$$

$$(\cos \alpha * A_x - \sin \alpha * A_y, \sin \alpha * A_x + \cos \alpha * A_y)$$

rotate left by 90 deg, multiply by matrix

$$\begin{pmatrix} \cos 90^\circ & -\sin 90^\circ \\ \sin 90^\circ & \cos 90^\circ \end{pmatrix} = \begin{pmatrix} 0 & -1 \\ 1 & 0 \end{pmatrix}$$



Rotate ABC by 30°

$$\begin{pmatrix} \cos 30^\circ & -\sin 30^\circ \\ \sin 30^\circ & \cos 30^\circ \end{pmatrix} = \begin{pmatrix} \sqrt{3}/2 & -1/2 \\ 1/2 & \sqrt{3}/2 \end{pmatrix} \approx \begin{pmatrix} 0.886 & -0.5 \\ 0.5 & 0.886 \end{pmatrix}$$

$$A' = (0.886 * 5 - 0.5 * 1, 0.5 * 5 + 0.886 * 1) = (3.93, 3.386)$$

$$B' = (0.886 * 7 - 0.5 * 2, 0.5 * 7 + 0.886 * 2) = (5.202, 5.272)$$

$$C' = (0.886 * 7 - 0.5 * 4, 0.5 * 7 + 0.886 * 4) = (4.202, 7.044)$$

Simple polygon

(No two of its non-adjacent boundary segments touch or intersect each other)

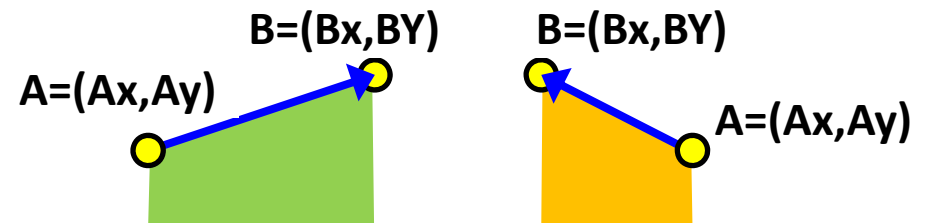
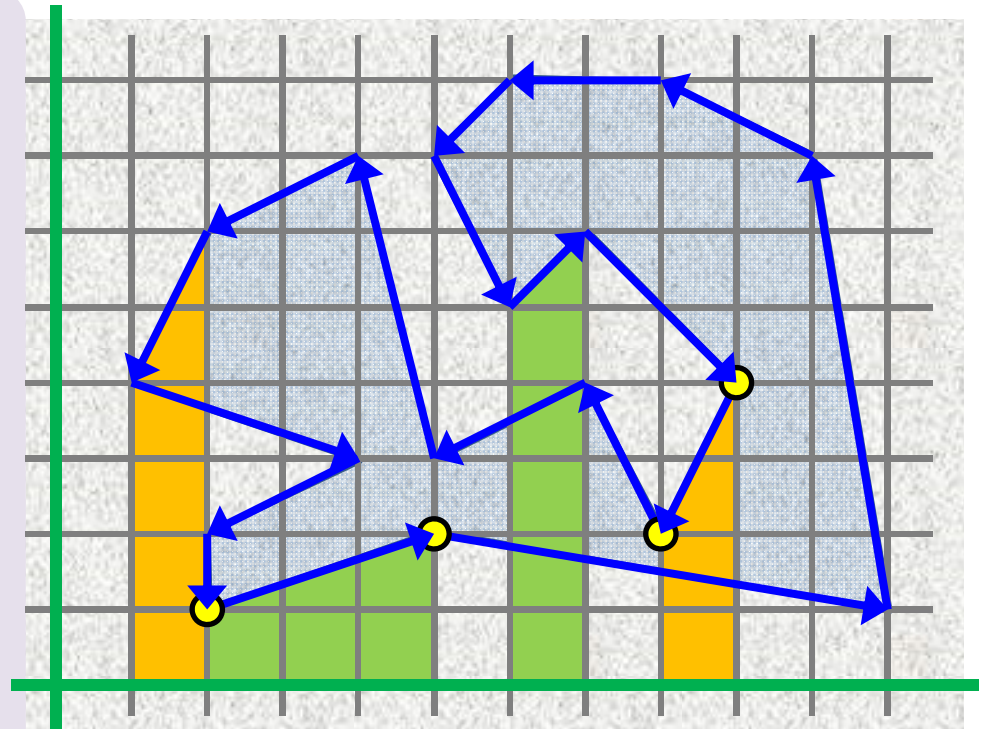
Area

Choose boundary direction
consider forward and backward trapezoids

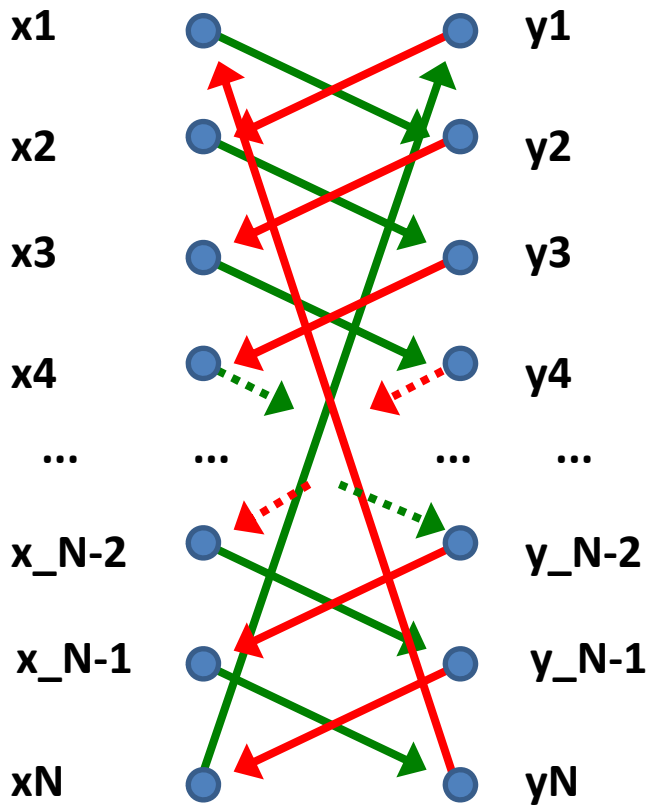
add all forward trapezoids area
subtract all backward trapezoids area

or equivalently

add all trapezoid areas
under assumption that the area of
backward trapezoids is negative

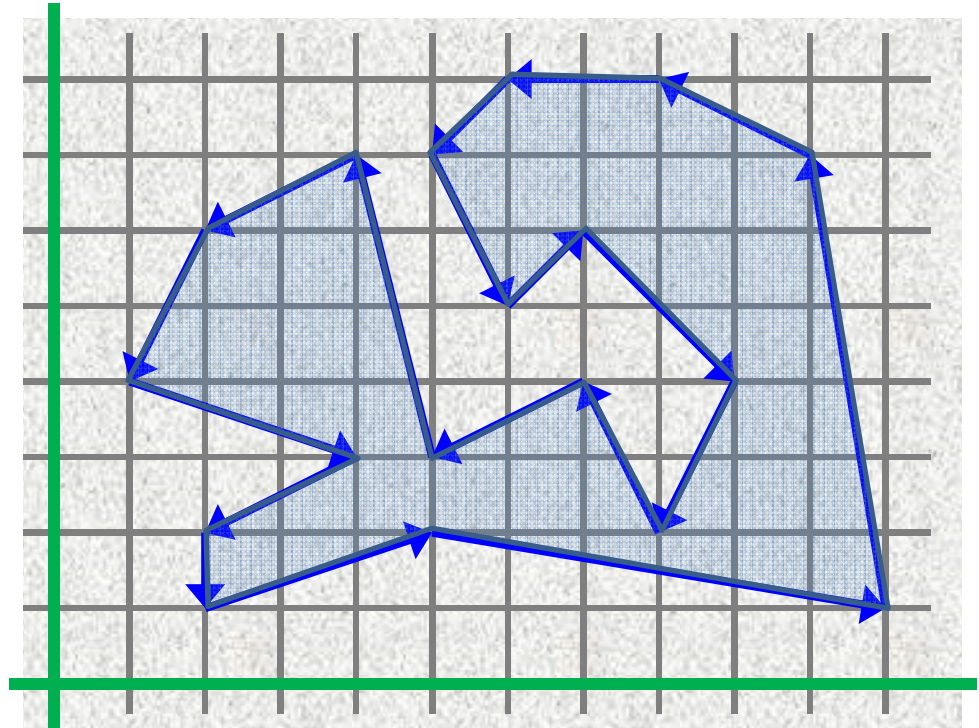


$$\text{Trapezoid area} = |(Ay+By)*(Bx-Ax)| / 2$$



Simple polygon

(No two of its non-adjacent boundary segments touch or intersect each other)



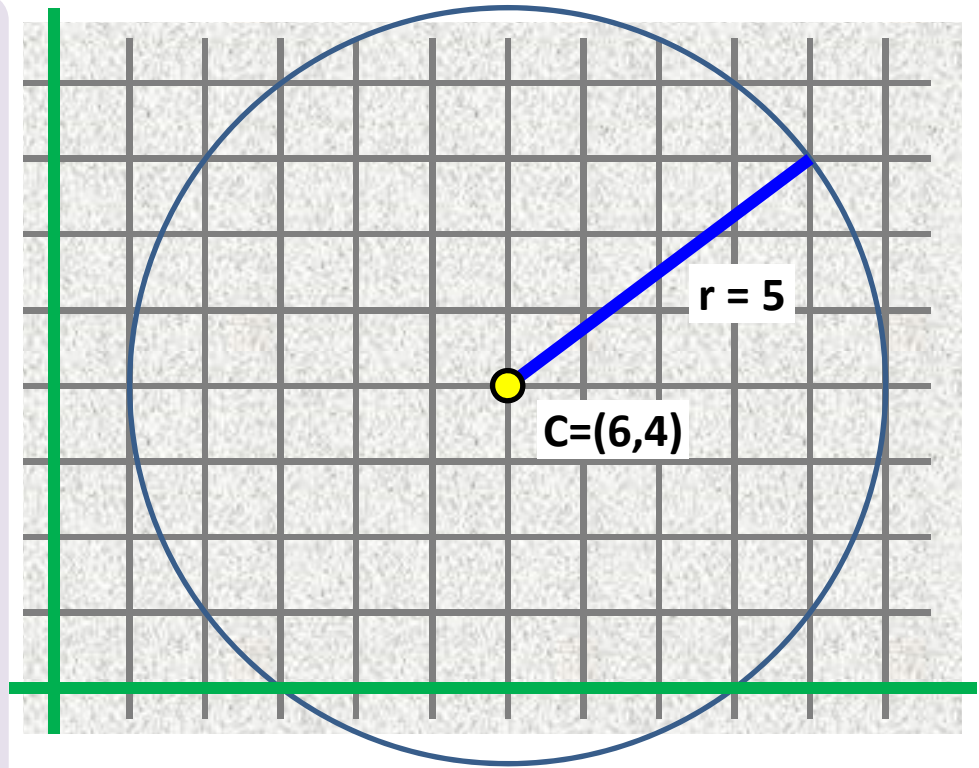
Area: Shoelace formula

$$\frac{1}{2} * (x_1 * y_2 + x_2 * y_3 + \dots + x_{N-1} * y_N + x_N * y_1 - x_2 * y_1 - x_3 * y_2 - \dots - x_N * y_{N-1} - x_1 * y_N)$$



Circle equation

$$(Cx - x)^2 + (Cy - y)^2 = r^2$$



Circle tangent in point T

$$\text{Circle eq: } (Cx - x)^2 + (Cy - y)^2 = r^2$$

tangent line equation

$$(Tx - Cx)(x - Cx) + (Ty - Cy)(y - Cy) = r^2$$

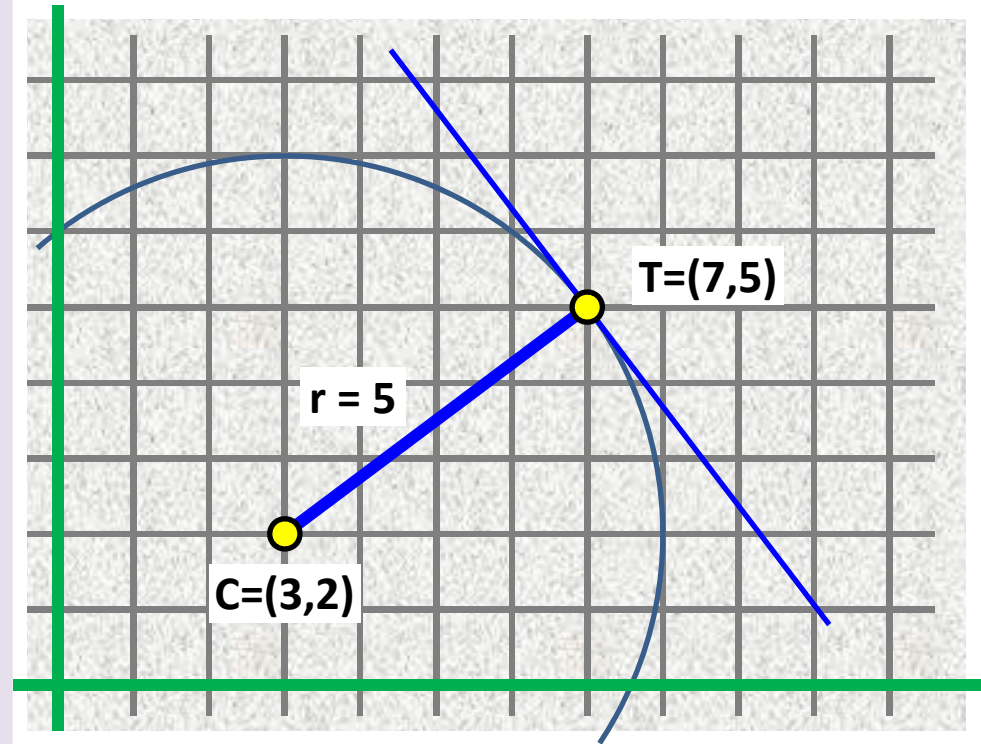
tangent line equation

$$ax + by + c = 0$$

$$a = Tx - Cx$$

$$b = Ty - Cy$$

$$c = Cx^2 + Cy^2 - r^2 - Cx \cdot Tx - Cy \cdot Ty$$



tangent line equation,

$$(7-3)(x-3) + (5-2)(y-2) = 25$$

$$4x - 12 + 3y - 6 = 25$$

$$4x + 3y - 43 = 0$$

Polar of a point T wrt a circle

Polar line connects points T' and T''.
Lines TT' and TT'' are tangent lines
to the given circle

Circle eq: $(Cx - x)^2 + (Cy - y)^2 = r^2$

polar line equation

$$(Tx - Cx)(x - Cx) + (Ty - Cy)(y - Cy) = r^2$$

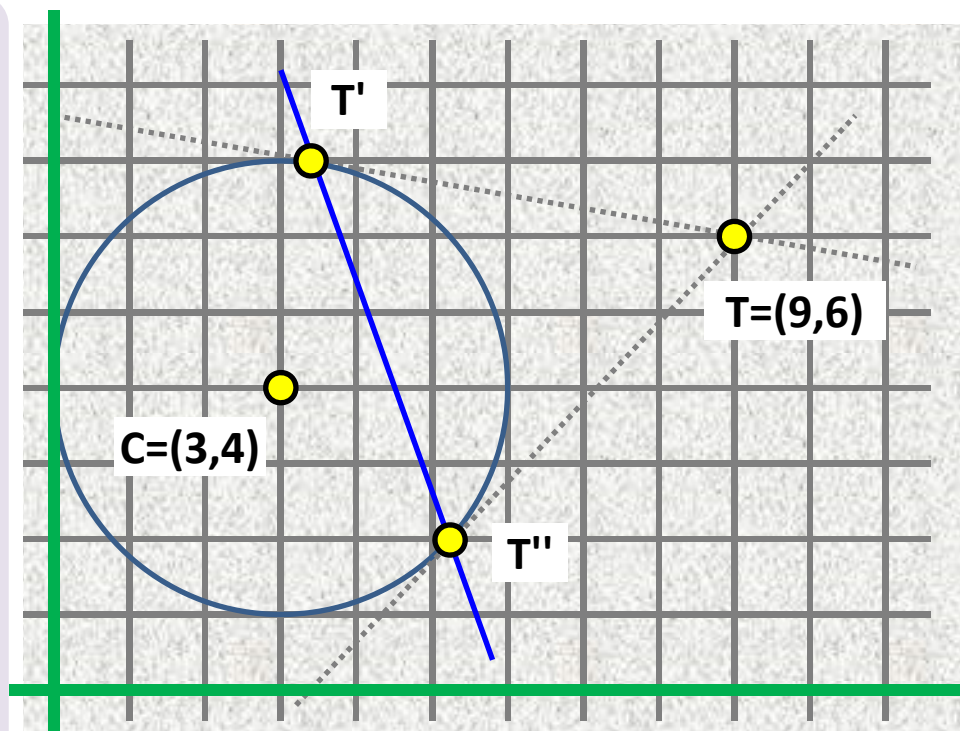
polar line equation

$$ax + by + c = 0$$

$$a = Tx - Cx$$

$$b = Ty - Cy$$

$$c = Cx^2 + Cy^2 - r^2 - Cx \cdot Tx - Cy \cdot Ty$$



polar line equation

wrt circle $(3 - x)^2 + (4 - y)^2 = 3^2$

T = (9, 6)

$$6x + 2y + 9 + 16 - 9 - 27 - 24 = 0$$

$$6x + 2y - 35 = 0$$